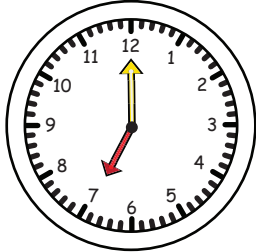


Name: _____

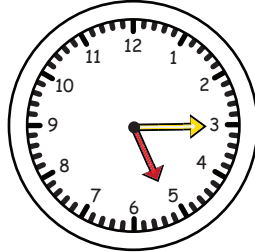
Date: _____

Write the start time and the end time,
then find out how much time has elapsed.

START TIME:




END TIME:




ELAPSED TIME:

(A1)

START TIME:



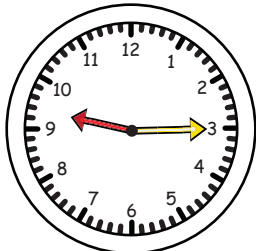
END TIME:




ELAPSED TIME:

(A2)

START TIME:




END TIME:



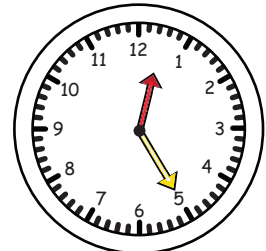
ELAPSED TIME:

(A3)

START TIME:




END TIME:



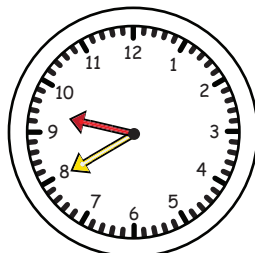
ELAPSED TIME:

(A4)

START TIME:



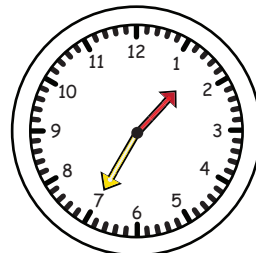
END TIME:




ELAPSED TIME:

(A5)

START TIME:



END TIME:



ELAPSED TIME:

(A6)

Name: _____

Date: _____

Look at the start time and the end time,
then find out how much time has elapsed.

START TIME:	END TIME:	ELAPSED TIME:
5:00 A.M.	11:25 A.M.	
11:55 A.M.	4:10 P.M.	
4:45 P.M.	1:50 A.M.	
12:05 P.M.	7:30 P.M.	
7:05 A.M.	9:35 A.M.	
7:45 A.M.	4:15 P.M.	
8:35 P.M.	11:40 A.M.	
1:00 P.M.	9:20 P.M.	
6:30 A.M.	3:25 A.M.	

(E1)

All pages in this digital product are copyrighted.

You may not sell this file, or printed copies of this product.

You may not post this file online, host it on school servers (examples Amazon Inspire, class websites, your personal website...)

Copyright Easy Peasy Learners