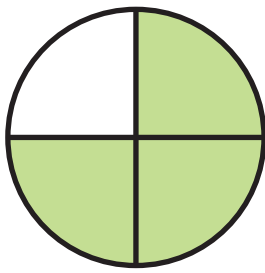


Name: \_\_\_\_\_


Date: \_\_\_\_\_

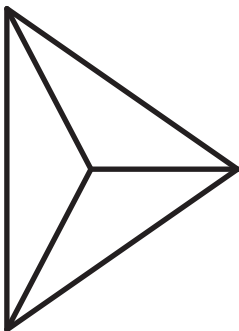
Write or shade in the missing equivalent fractions

$$\frac{1}{3} = \frac{\square}{6}$$

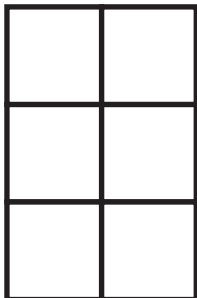

$$= \frac{9}{\square}$$

$$\frac{2}{8} = \frac{1}{\square}$$


$$= \frac{\square}{14}$$

$$\frac{5}{15} = \frac{\square}{\square}$$


$$\frac{2}{12} = \frac{\square}{6}$$

$$\frac{8}{12} = \frac{\square}{\square}$$


$$\frac{3}{9} = \frac{4}{\square}$$